

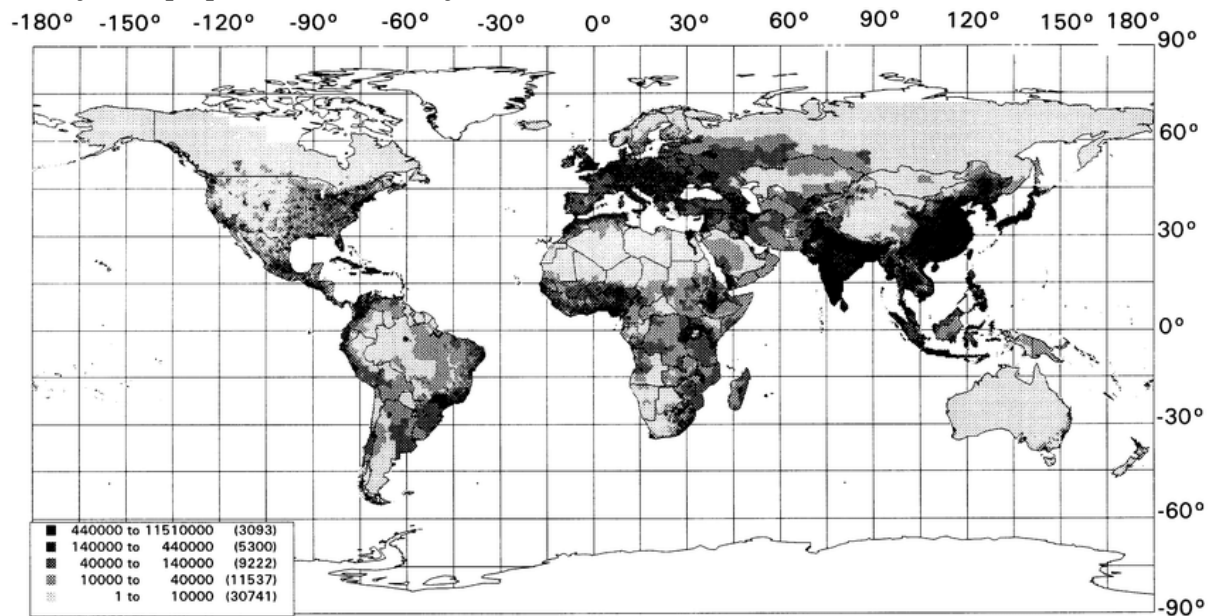
EFFINGHAM SECONDARY SCHOOL

GEOGRAPHY- TERM 3

POPULATION

ACTIVITY 1 – POPULATION DENSITY AND STRUCTURE:

Study the population density over the world:



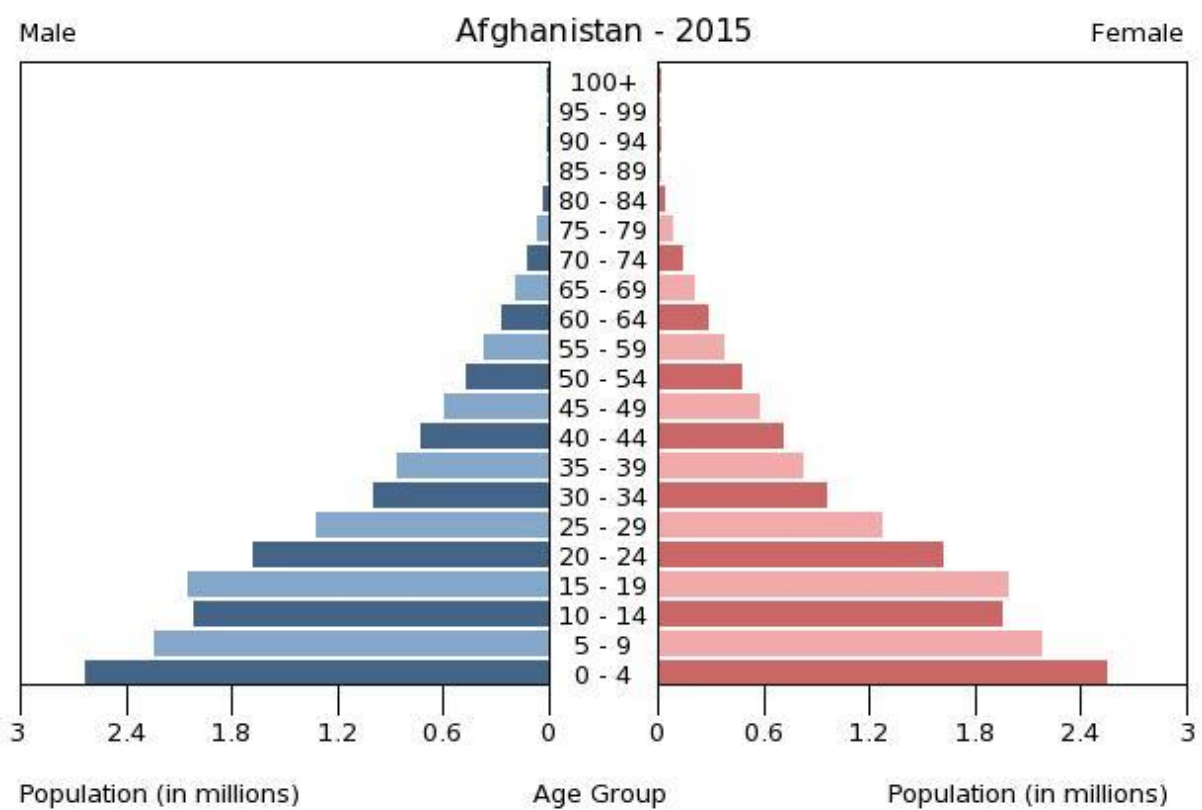
- 1.1. Most of the population is located in the (Northern/Southern) hemisphere.
- 1.2. Which continent has the biggest population density?
- 1.3. Explain how climate can influence the distribution of people.
- 1.4. Explain the difference between population distribution and population density.
- 1.5. State if the following statements are TRUE or FALSE:
 - 1.5.1 New Zealand is a small country with a small population.
 - 1.5.2 Developed countries are overpopulated.
 - 1.5.3 India's population is in proportion with the rest of the world.
 - 1.5.4 Technology influence the distribution of a population.
- 1.6. Use the following information and calculate the population density:

Area: 1 219 488 *km*²

Population: 53 877 147

ACTIVITY2- POPULATION GROWTH:

Refer to the figure showing population pyramid of Afghanistan (2015) and answer the questions that follow.



2.1. Use the population pyramid to determine the following:

- (a) Number of males aged 25 to 29 years
- (b) Number of females aged 45 to 49 years
- (c) Total number of people aged 0 to 4 years

2.2. Identify the age group that makes up the biggest portion of the total population.

2.3. Would you classify Afghanistan as a developing or developed country?

2.4. Provide ONE piece of evidence from the pyramid to support your answer in QUESTION 3.

2.5. In a paragraph of approximately EIGHT lines, describe negative effects of overpopulation in a country such as Afghanistan.

Activity 3

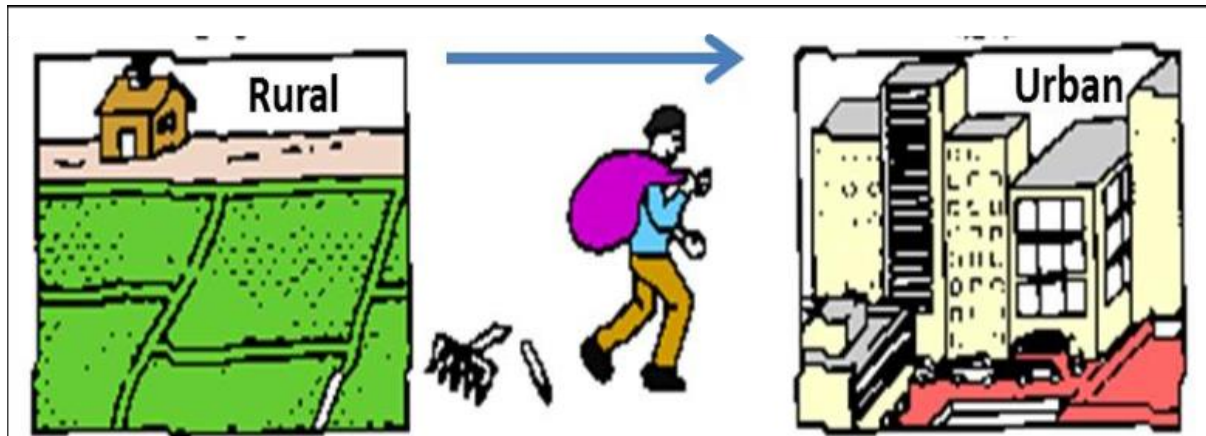
Refer to the figure 3.1 about overpopulation



1. Define overcrowding.
2. Name TWO factors that cause overcrowding.
3. Explain why the population distribution of the world is unequal can be described.
4. Would you describe the distribution in the developing world as overcrowded or sparsely populated? Give a reason to support your answer.
5. Explain the negative impact of overcrowding on resources

ACTIVITY 3

Refer to the source and answer the following questions.



1. Identify the type of migration taking place in the figure.
2. Name TWO push factors resulting in people leaving their farms.
3. State TWO problems experienced by a city as a result of people moving there.
4. Discuss TWO methods that can be used to reduce the number of people who leave their farms.